

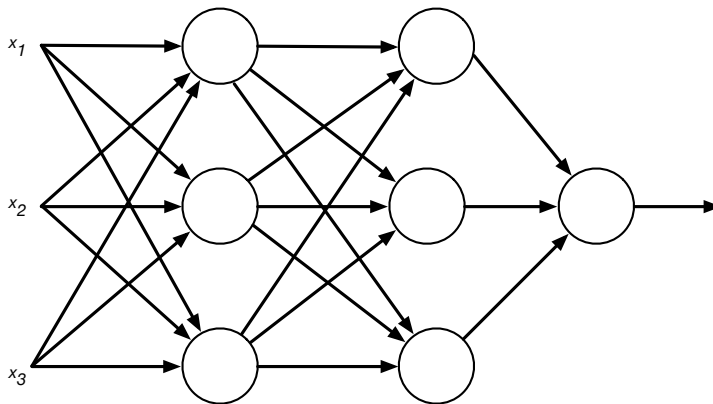
CS294-082: Experimental Design for Machine Learning on Multimedia Data
Fall 2019

Homework 4

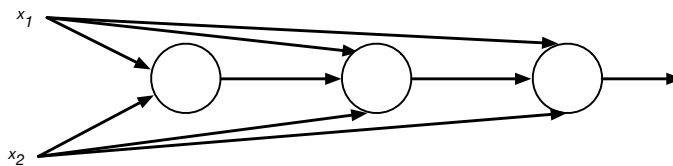
To be discussed: October 4th, 2019

- 1) What is the maximum Memory Equivalent Capacity of the following neural networks. Assume binary classification, all weights are non-zero and all units have biases.

a)



b)



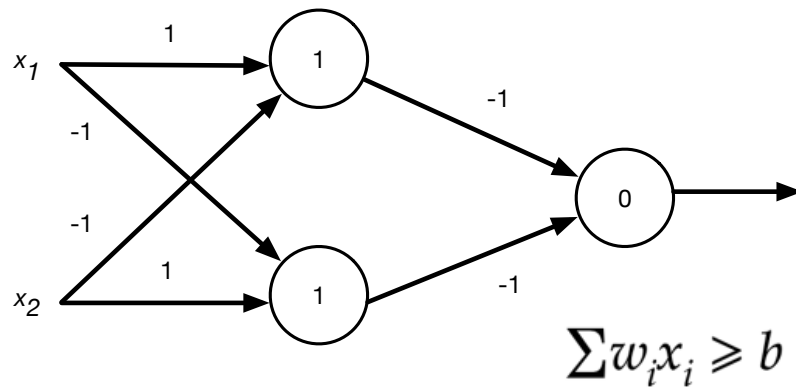
- c) What is the maximum amount of rows that each network in a) and b) can memorize?

d) Answer c) but for 4 classes instead of binary classification.

- 2) Draw two different neural network architectures that can guarantee to memorize the training data of a 12-instance binary classification problem of 4 dimensional inputs (assuming perfect training).

- 3) Convert the following neural network into

- a) a decision tree, and
b) a finite state automaton.



This network will play an important role later.

4) 2,4,6,8,...

Train a neural network of your choice to (TensorFlow, Keras, PyTorch, SciKit Learn, Cafe, Weka, self-build, etc...) to distinguish odd from even numbers.

- How many neurons are needed theoretically?
- How many neurons did you end up using?
- Discuss the limitations of your implementation.

5) First thoughts on Multimedia.

Do Exercise 40.8 in MacKay's book.